






NAME _____ DATE _____

WAYS TO MAKE 8!

Match the followings to show the partners of 8.



Then write a number bond for each partner.

